



Delhi Public School, Gwalior

(Under the Aegis of DPS Society, New Delhi)

Class – III

Subject – Environmental Studies

Model Test Paper

Time- 2 Hr. 30 min.


Name _____ Sec. _____ Roll no _____ Date _____

Instructions :

- * Carefully read and answer all the questions.
- * Answer them one by one, in the order given in your paper.
- * Do not spend too much time on any question and do your best.

I. Picture observation.

1.



(a) Identify the animal.

_____.

(b) It _____ on its legs to move around.


2.



(a) Identify the helper. _____

(b) He works in a _____.

3.



(a) Identify the vehicle.

(b) It moves on _____.

II. Fill in the blanks.

1. A _____ helps to build our houses.
2. Bees give us _____.
3. _____ protects and nourishes the seeds.
4. _____ make the plant look beautiful.
5. Rose plant is a _____.
6. Some couples _____ children and raise them as their own.
7. All family members _____ each other.
8. _____ leaf is used as a plate to eat food.
9. Old Age Day is celebrated on _____.
10. _____ script is used by blind people to read and write.

III. (A) Answer in one word.

1. I make food for the plant. Who am I? _____
2. I can copy a man's voice. Who am I? _____
3. I treat the animals when they are sick. Who am I? _____
4. Name the process by which plants make their food. _____
5. Which stick is used by blind people? _____

(B) Read the hint and complete the word.

1. She takes care of the patients. _____u_____e
2. This type of family is always a big family. _____i_____t
3. He works on farm to grow food. F_____er
4. We eat the stem of this plant. S_____a_____c_____e
5. It has a broad and flat beak. _____c_____

IV. State whether the statements are 'True' or 'False'.

1. A crocodile can live only in water. _____
2. Cows and buffaloes give us eggs. _____
3. A mechanic works in a garage. _____

4. We should take care of our pets. _____
5. People who cannot hear are called dumb. _____
6. Mother's sister's children are our cousins. _____
7. Cuckoo lays eggs in crow's nest. _____
8. Perfumes are made from jute plants. _____
9. Louise Braille was born in the year 1806. _____
10. Water melon is a creeper. _____

V. Tick (✓) the correct option (MCQ).

1. _____ is an edible root.
(a) Radish (b) Ginger (c) Mango
2. A person who designs buildings.
(a) Doctor (b) Architect (c) Teacher
3. In which of these occupation whole family is involved?
(a) Teaching (b) Nursing (c) Sculpting
4. It anchors the plant into the soil.
(a) Root (b) Stem (c) Flower
5. Plants make the air fresh by giving _____.
(a) carbon-dioxide (b) oxygen (c) nitrogen
6. It has strong, sharp and hooked beak to tear the flesh.
(a) Parrot (b) Sparrow (c) Vulture
7. A push-cart is used by _____.
(a) green-grocer (b) barber (c) cobbler
8. A person who drives the car is _____.
(a) gardener (b) chauffeur (c) cook
9. World White Cane Day is celebrated on _____.
(a) 15th November (b) 15th January (c) 15th October
10. Louise Braille was born in the village of _____.
(a) France (b) Japan (c) India

VI. (A) Give reasons.

1. People who cannot see or hear are differently abled because _____


2. A woodpecker has a chisel like beak because _____

(B) Circle the odd one out.

1. snakes spiders cockroaches crocodiles
2. bitter gourd mango coconut banana

VII. Identify the pictures.

1.



2.



VIII. (A) Full forms.

1. PCO - _____
2. STD - _____
3. PIN - _____
4. ISD - _____

(B) Twisted questions.

1. Doctor : hospital :: farmer : _____
2. Cardiologist : heart :: dentist : _____

IX. Answer the following.

(A) Very short answers. (Any Five)

1. Define roughage.

Ans. _____

2. Define herbs.

Ans. _____

3. What are fraternal twins?

Ans. _____

4. Name any two means of transport that are used to travel long distances.

Ans. _____

5. Give two examples of unstitched cloth that are worn as clothes?

Ans. _____

6. What is occupation?

Ans. _____

(B) Short answer. (Any Four)

1. What are aquatic plants?

Ans. _____

2. Why is water transport the cheapest?

Ans. _____

3. How is knitting different from weaving?

Ans. _____

4. What is a small family?

Ans. _____

5. Who are domestic helpers?

Ans. _____

(C) Long answers. (Any One)

1. How do family members take care of each other?

Ans. _____


OR

Write different uses of leaves.

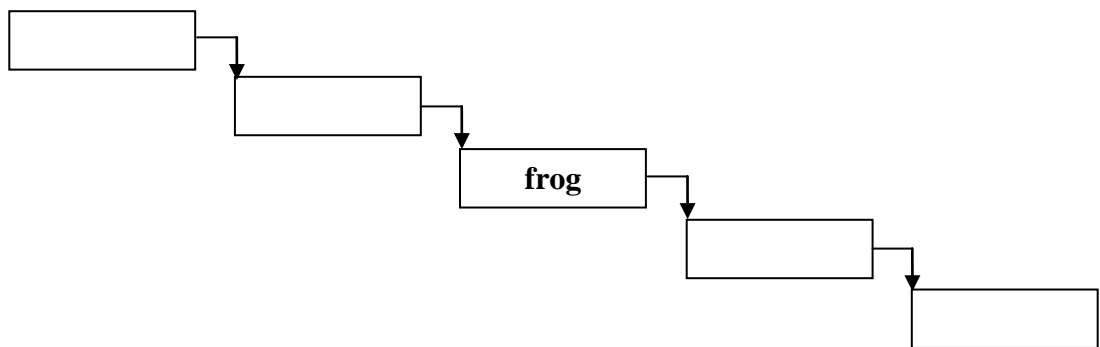
Ans. _____

X. Label the diagram shown.

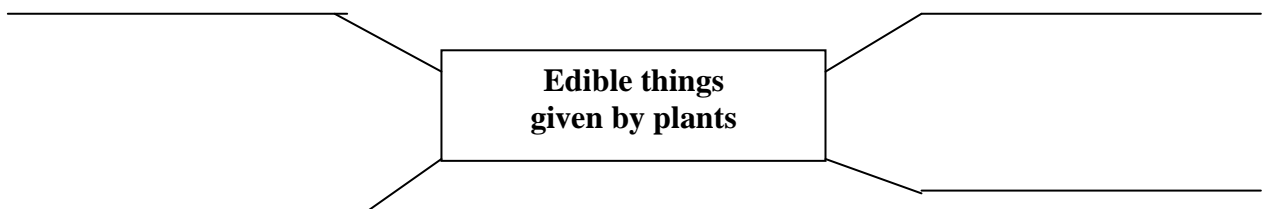
1. Parts of a Plant



2. Complete the food chain:




3. Complete the Web Chart.



XI. Draw and label the diagrams.

1. Any one place of your neighbourhood.



2. Edible stem.



-----X-----

Dear Ma'am / Sir,

- | | | |
|----|---|----------|
| 1. | I have checked my desk area before exam. | YES / NO |
| 2. | I have read the paper thoroughly and answered all the questions. | YES / NO |
| 3. | I have revised the answers at least once. | YES / NO |
| 4. | I have done all the activities – diagrams/map/web charts/flow charts and checked all the spellings. | YES / NO |

Student Name