



Delhi Public School, Gwalior

(Under the Aegis of DPS Society, New Delhi)

Class – IV

Subject – Environmental Studies

Model Test Paper

Time- 2 Hr. 30 min.

Name _____ Sec. _____ Roll no _____ Date _____

Instructions :

- * Carefully read and answer all the questions.
- * Answer them one by one, in the order given in your paper.
- * Do not spend too much time on any question and do your best.

I. Picture Observation.

1.



(a) Identify the astronaut.

(b) She was selected by _____ to be trained as an astronaut.

2.



(a) Identify the famous personality.

(b) She is a _____ parent.

3.



(a) Identify the picture.

(b) The climate of this region is _____ and dry.

II. Fill in the blanks.

1. A small family is called _____ family.
2. Mother's relatives are called _____ relatives.
3. We should not discriminate between people on the basis of _____.
4. The fish is _____. I cannot hold it.
5. _____ is the basic unit of society.
5. A _____ flies an aeroplane.
6. The doctors study and are trained for their profession at _____ colleges.
8. Some _____ animals are put into herds by humans.
9. The practice of rearing honey bees is called _____.
10. Roots absorb _____ from the soil.

III. Answer in one word:-

1. A large group of frogs _____
2. People who mend our shoes _____
3. The food that never spoils _____
4. Animals that give birth to young ones
and produce milk to feed them _____
5. Special script for visually impaired _____
6. The sweet liquid produced by flowers _____
7. It is used to treat minor injuries _____
8. Thinnest skin of our body _____
9. Coloured part of a flower _____
10. Animals who hunt other animals _____

IV. State whether the statements are 'True' or 'False' :-

1. Grass has fibrous roots. _____
2. A potter makes pots on a potter's wheel. _____
3. We take important decisions collectively. _____
4. Slapping is a good touch. _____
5. Hockey is an indoor game. _____

6. Children who play with us are our playmates. _____
7. To play stappoo we need a thippi. _____
8. A doctor builds bridges. _____
9. A group of fish is called troop. _____
10. Carpel is the green part of flower. _____

V. Tick (✓) the correct option (MCQ).

1. The stingless male bee in beehive.
(a) Drone bee (b) Queen bee (c) Workers bee (d) None
2. People who sell flowers.
(a) Grocer (b) Green grocer (c) Florist (d) Cobbler
3. _____ is a shy animal.
(a) Lion (b) Cow (c) Squirrel (d) Tiger
4. Thickest skin of our body.
(a) Eyelid (b) Hands (c) Face (d) Footsole
5. Which of the following game is not played in the field?
(a) Cricket (b) Hockey (c) Football (d) Carrom
6. A powerful special vehicle that takes astronauts safely into space.
(a) Space agency (b) Space shuttle (c) Aeroplane (d) Helicopter
7. The person who builds bridges.
(a) Engineer (b) Pilot (c) Plumber (d) Blacksmith
8. _____ bee guards the hive.
(a) King (b) Queen (c) Worker (d) none
9. The hair like structures hanging from a banyan tree are called _____.
(a) aerial root (b) taproot (c) fibrous root (d) stem
20. A flower develops from _____.
(a) bud (b) root (c) leaf (d) stem

VI. (A) Give reasons.


1. Trees on hills have conical shape and needle like leaves because

2. Birds migrate because _____

(B) Circle the odd one.

1. Monkey Tiger Cow Goat
2. Well Tubewell RO Hand pump

(C) Identify the pictures.



VII. (A) Full forms.

1. LBW - _____
2. CWG - _____
3. NASA - _____
4. P.Ed - _____

(B) Twisted questions.

1. Sweat dries up due to _____.
(a) condensation (b) precipitation (c) evaporation
2. If we stand facing the setting sun, the _____ is in front of us.
(a) North (b) West (c) East

VIII. Answer the following.

(A) Very short answer. (Any Five)

1. Define adoption.

Ans. _____

2. Name three types of bee communities.

Ans. _____

3. Which is the main source of water for crops?

Ans. _____

4. Which part is called kitchen of plants?

Ans. _____

5. What is map?

Ans. _____

6. Define occupation.

Ans. _____

(B) Short answers. (Any four)

1. What are social insects?

Ans. _____

2. What are team games? Give two examples.

Ans. _____

3. Why is playing important?

Ans. _____

4. Why do animals live in groups?

Ans. _____

5. How can you reduce water pollution?

Ans. _____

(C) Long Answer. (Any One)

1. Differentiate between immediate family and extended family.


Ans. _____

OR

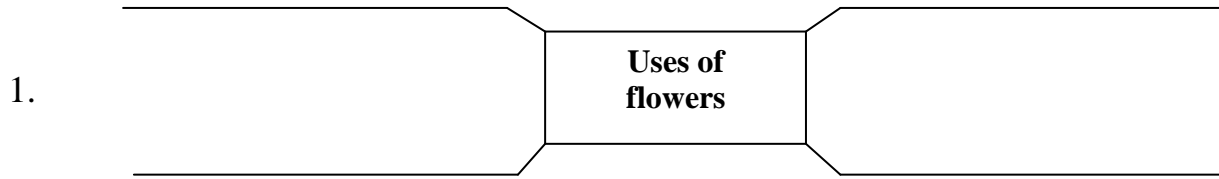
What are the functions of the roots?

Ans. _____

X. (i) Label the diagram.



(ii) Complete the web charts



XI. Draw and label the following diagrams.

1. A flower



2. Any four sense organs along with their names.



-----X-----

Dear Ma'am / Sir,

- | | | |
|----|---|----------|
| 1. | I have checked my desk area before exam. | YES / NO |
| 2. | I have read the paper thoroughly and answered all the questions. | YES / NO |
| 3. | I have revised the answers at least once. | YES / NO |
| 4. | I have done all the activities – diagrams/map/web charts/flow charts and checked all the spellings. | YES / NO |

Student Name