



Delhi Public School, Gwalior

(Under the Aegis of DPS Society, New Delhi)

Class – V

Subject – Environmental Studies

Model Test Paper

Time- 2 Hr. 30 min.


Name _____ Sec _____ Roll no _____ Date _____

Instructions :

- * Carefully read and answer all the questions.
- * Answer them one by one, in the order given in your paper.
- * Do not spend too much time on any question and do your best.

I. Picture observation.

1.




(a) Identify the famous personality.

(b) At the time of birth she was

_____.

2.



(a) Illegal killing of animals is known as _____.

(b) The Indian rhino is being killed for its _____.

3.



(a) Identify the type of irrigation.

(b) The fields are made into a number of _____.

II. Fill in the blanks.

1. Air is a _____ of many gases.
2. Traditional Indian families were mostly _____ dominated.
3. The two cross-pieces that rest on each group of the stumps are called the _____.
4. Forests are called _____ of the environment.
5. Animals are our national _____ and must be protected.
6. A person who leads the game is known as _____.
7. The fast moving air is _____.
8. Gandhiji worked for the _____ of Harijans.
9. An _____ can spot its prey from miles away.
10. Deaf and dumb people can learn to speak through the _____ language.

III. Answer in one word.

1. Study of families _____
2. Modern name of pehlwani _____
3. The gently moving air _____
4. The passage behind nostrils _____
5. Milk giving animals _____
6. Process of breathing _____
7. Holes present in leaves _____
8. Children born to the same parents _____
9. Cutting down of forests _____
10. People of God _____

IV. State whether the statements are 'True' or 'False' :-

1. Families shift from place to place just for fun. _____
2. Poachers are the people who hunt wild animals illegally. _____

3. Pollution affects wild animals. _____
4. A cobbler stitches our clothes. _____
5. Most of the air is comprised of nitrogen. _____
6. The wind helps the sailboat to sail in the seas. _____
7. Kung Fu is a martial art from Mizoram. _____
8. Archery is an individual sport. _____
9. People who have lost their limbs can get benefited by using artificial limbs. _____
10. Payasam is prepared only in Gujarat. _____

V. Tick (✓) the correct option (MCQ).

1. _____ is a mental attribute.
(a) Hobby (b) Height
(c) Complexion (d) Colour of eyes
2. _____ is a traditional game.
(a) Cricket (b) Hockey (c) Football (d) Kabaddi
3. Composition of oxygen in air is _____.
(a) 78% (b) 21% (c) 68% (d) 31%
4. Which is not an animal product?
(a) Leather (b) Milk (c) Pearl (d) Cotton
5. _____ don't have ears but feel sound waves.
(a) Snakes (b) Eagles (c) Honey-bees (d) Cats
6. Plants use _____ to prepare food.
(a) oxygen (b) carbon-dioxide
(c) nitrogen (d) none
7. _____ is not a martial art.
(a) Kung fu (b) Wushu (c) Judo (d) Gilli Danda
8. _____ is an individual game.
(a) Shooting (b) Hockey (c) Cricket (d) Kabaddi

9. Dal-Bati-Choorma is a special dish of _____.
- (a) Punjab (b) Rajasthan (c) Gujarat (d) Kerala
10. Green pigment present in leaves is _____.
- (a) stomata (b) oxygen (c) chlorophyll (d) none

VI. (A) Circle the odd one out.


- (1) Mercury Earth Comet Venus
- (2) Heating Salting Stomache Sweetening

(B) Give reason.

- (1) We should care our historical building because _____.
- (2) We should take prevention for communicable diseases because _____.
- _____.

(C) Identify the pictures.

1.



2.



VII (A) Write the full forms of :-

1. CWG _____
2. ADAPT _____
3. IPL _____
4. PEM _____

(B) Twisted questions:

1. Cyclones take place in the _____.
(a) mountains (b) coastal areas (c) plains
2. Land pollution is caused by excessive use of _____.
(a) manure (b) fertilizer (c) pesticide

VIII. Answer the following :

(A) Very Short Answers. (Any Five)

1. Define Family.

Ans. _____

2. Name an animal which sleeps with its eyes open.

Ans. _____

3. What are openings in the nose called?

Ans. _____

4. Name the sheet of muscles below the lungs.

Ans. _____

5. What are the main parts of the brain?

Ans. _____

6. Define photosynthesis.

Ans. _____

(B) Short Answers (Any Four)

1. What is migration?

Ans. _____

2. Why are animals endangered?

Ans. _____

3. What is team spirit?

Ans. _____

4. What is the role of Gandhiji to remove “Untouchability”?

Ans. _____

5. Why do we live in a community?

Ans. _____

(C) Long Answer. (Any 1)

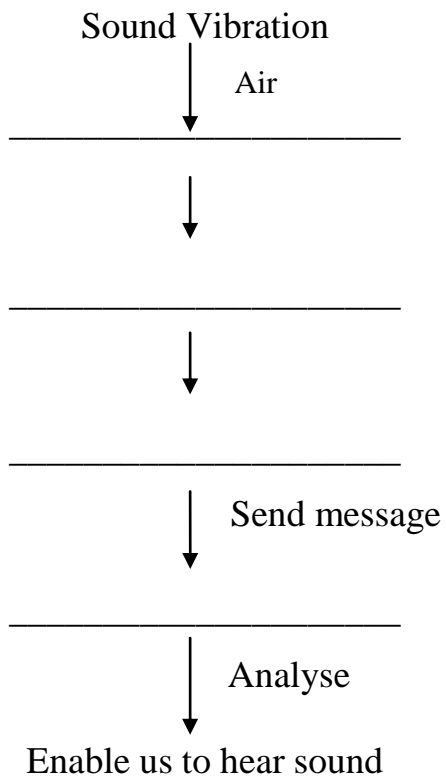
1. What is step farming? How does it prevent soil erosion?

OR

What do you mean by differently abled or physically challenged people?


X. Complete the following activities.

1. Flow Chart



2. Web Charts.

(a)



(b)



XI. Draw and label the diagrams.

1. Human Respiratory System
2. Composition of Air

-----X-----

Dear Ma'am / Sir,

- | | | |
|-----------|--|-----------------|
| 1. | I have checked my desk area before exam. | YES / NO |
| 2. | I have read the paper thoroughly and answered all the questions. | YES / NO |
| 3. | I have revised the answers at least once. | YES / NO |
| 4. | I have done all the activities – diagrams/map/web charts/flow charts and checked all the spellings. | YES / NO |

Student Name